



**DELHI PUBLIC SCHOOL DAULATPUR, HARIDWAR**  
**Summer Holidays Homework (2021-22)**  
**(Class V)**

**Subject- Mathematics**  
**WORKSHEET -1 (Operations on Large Numbers)**

**Q1. Add**

a)  $765428097 + 89356893$

b)  $890341265 + 218126459 + 742958003$

**Q2. Subtract the following and check your answer with addition:**

a)  $447147909 - 36518698$

b)  $558258014 - 72102162$

**Q3. Simplify:**  $4,35,06,789 + 59,67,892 + 25,76,19,517 - 19,76,635$

**Q4. What must be added to 79,62,360 to make it equal to 80,00,000?**

**Q5. Write the product:**

a)  $9572 \times 100$

b)  $695 \times 30$

c)  $6584 \times 408$

d)  $5098 \times 7040$

**Q6. A builder constructs 480 flats in a society. If each flat costs Rs. 54,90,560, what is the total cost of all the flats?**

**Q7. Divide:**

a)  $14,375 \div 16$

b)  $2,79,845 \div 64$

c)  $2000002 \div 6794$

**Q8. 7,65,564 books are to be arranged equally in shelves. If 85 books are to be arranged in each shelf, how many shelves will be needed?**

**Q9. Divide the greatest 8 digit number by the greatest 3 digit number.**

**Q10. 32 bags of rice weigh 1216 Kg. Estimate the weight of 8 bags of rice.**

.....

## WORKSHEET -2 (Large Numbers & Roman Numbers)

**Q1.** In the place value chart, the numeral 7 in 17,408,910 falls in the period:

- (i) Hundreds
- (ii) Ten lakh
- (iii) Million
- (iv) Ones

**Q2.** The smallest 5 digit number using digits 2, 5, 0, 9 and 1 is:

- (i) 01259
- (ii) 10259
- (iii) 10529
- (iv) 02159

**Q3.** One half of a million = \_\_\_\_\_ Lakh.

- (i) Fifty
- (ii) Five
- (iii) Two
- (iv) One half

**Q4.** The numeral for Forty Crore Seventy in Indian System is:

- (i) 4,070
- (ii) 4,00,00,070
- (iii) 40,00,00,070
- (iv) 40,000,070

**Q5.** The word formation of 1,900,803 in International System is:

- (i) Nineteen lakh eight hundred three
- (ii) One million nine hundred thousand eight hundred three
- (iii) Nineteen million eight hundred three
- (iv) Nineteen hundred thousand eight hundred three

**Q6.** P is a natural number which is equal to difference between 3 digits greatest and smallest number.

Write the Roman numeral for P

- A) DCCCXCIX
- B) DCCCLCIX
- C) CCMXCIX
- D) CMCXCIX

**Q7.** Which one of the following statements is not true?

- A) M is a symbol for 1000 in Roman numeral
- B) Roman numeral system does not include 0
- C) In Roman numeral X is written right to the L for 40
- D) Only symbols I, V, X are used to write first 10 Roman numeral

**Q8.** Convert 100 into Roman numeral.

- A) L
- B) X
- C) D
- D) C

**Q9.** For which one of the following numbers each symbol of Roman numeral is used to write?

- A) 111
- B) 525
- C) 1111
- D) 1444

**Q10.** Using the symbols I, V, X, L write the smallest Roman numeral. Symbol should not be repeated.

- A) IVXL
- B) LXIV
- C) XLVI
- D) XLIV

=====

**SUBJECT- ENGLISH GRAMMAR**  
**WORKSHEET -1**

**Summer holidays are just here! Make good use of the time. Enjoy doing your homework.**

**EXCERCISE**

**A. Rewrite the following groups of words to form meaningful sentences.**

**Also use capital letters wherever necessary.**

1. there 30 students in are the class
2. on the table lying the books are
3. does work her she properly
4. are beautiful the flowers
5. please a glass of water bring

**B. Identify the kinds of the following sentences.**

1. Ram has two pens.
2. How far is your school?
3. Hurrah we have won the match.
4. Open the door.

**C. Change the following sentences into the interrogative ones.**

1. They are brother and sister.
2. He was a brave man.
3. Kamal will go to Agra.
4. Radhika is dancing.

**D. Change the following interrogative sentences into the assertive ones.**

1. Do you like to play cricket?
2. Is David a naughty boy?
3. Is she preparing for the exam?
4. Has he taken a bath?

**E. Divide each of the following sentences into subject and predicate.**

1. The sheep are grazing in the field.
2. The village schoolmaster taught in his little school.

3. Ravi always does his lessons well.
4. The poor little boy's sums are all wrong.
5. The man standing in the corner is a policeman.

F. Add predicates to these subject.

1. My friend .....
2. The door of the next classroom .....
3. An old man .....
4. The richest man in our village .....
5. A large number of women and children .....

G. Add subjects to these predicates.

1. .... is watering the plants.
2. .... lost her purse.
3. .... sells butter, sugar and tea.
4. .... have lost all their leaves.
5. .... is the highest mountain in the world.

H. Match column A with column B.

A (subject)	B (predicate)
1. A black dog	i. sweep clean.
2. New brooms	ii. barked very loudly at me.
3. Wild animals	iii. brings us letters.
4. The postman	iv. moves around the Sun.
5. The Earth	v. are kept in cages.

I. Formal letter

1. Write a letter to the Principal thanking her for arranging the 'Online Summer Camp' which brings creativity and efficient use of time.

Or

Write a letter to the Principle requesting her to grant you two days leave as there is a celebration in your family.

## **ANSWERS**

**A 1. There are 30 students in the class.**

**2. The books are lying on the table.**

**3. She does her work properly.**

**4. The flowers are beautiful!**

**5. Please bring a glass of water.**

**B 1. Assertive**

**2. Interrogative**

**3. Exclamatory**

**4. Imperative**

**C 1. Are they brother and sister?**

**2. Was he a brave man?**

**3. Will Kamal go to Agra?**

**4. Is Radhika dancing?**

**D 1. You like to play cricket.**

**2. David is a naughty boy.**

**3. She is preparing for the exam.**

**4. He has taken a bath.**

**E 1. Subject – The sheep**

**Predicate – are grazing in the field.**

**2. Subject – The village schoolmaster**

**Predicate – taught in his little school.**

**3. Subject – Ravi**

**Predicate – always does his lessons well.**

**4. Subject – The poor little boy's**

**Predicate – sums are all wrong**

**5. Subject – The man**

**Predicate – standing in the corner is a policeman.**

**F 1. is very tall.**

**2. is broken.**

**3. is doing yoga.**

**4. is getting married.**

**5. are standing in the queue.**

**G 1. The gardener**

**2. Sheela**

**3. The grocer**

**4. The trees**

**5. Mt. Everest**

**H 1. (ii)**

**2. (i)**

**3. (v)**

**4. (iii)**

**5. (iv)**

# SUBJECT- ENGLISH LITERATURE

## WORK WORKSHEET - II

### EXERCISE

Q1. Fill in the blanks

- i. When ..... in the city and brick's a ..... of heat.
- ii. The Ice cream Man with his little ..... goes ..... down the street.

Q2. Answer the following questions.

- i. What are the two things that the Ice cream Man is selling?
- ii. Name two indoor and out door activities.
- iii. Name the ingredients used to make Avial.
- iv. Name the team members needed to run a good school.
- v. Why did the geese pretend to be dead?
- vi. Where did the geese live?

Q3. State whether true or false

- i. The wise old bird helped them to escape. \_\_\_\_\_
- ii. The tree was the house of a flock of parrots. \_\_\_\_\_
- iii. The King had ordered a dinner in the palace. \_\_\_\_\_
- iv. No one heard of or tasted avial before. \_\_\_\_\_

Q4. Unscramble the words.

- i. Tmeingtp \_\_\_\_\_
- ii. Doceraet \_\_\_\_\_
- iii. Temakrow \_\_\_\_\_
- iv. Glao \_\_\_\_\_

Q5. Give the synonyms

- i. Shoot –
- ii. Dream –
- iii. Destroy -
- iv. Struggle –
- v. Winding -



Q6. Give the antonyms

i. Sternly –

ii. Traditional –

iii. Blaze –

iv. Joy –

v. Mutter -

### Comprehension Passage

**Read the passage and answer the following questions:**

Time is very valuable. If it passes away, it cannot be brought back even after spending lakhs and crores of rupees. Whoever has valued time in this world, he has lived life with happiness and who has wasted time, he has wasted himself.

Ask the time, the player who missed the medal by the hundredth of a second. The train standing at the station is missed by a minute. Nowadays, many students are not even allowed to enter the school if they come late. Students should understand the value of time even more because by appreciating this life, they can achieve their goals of life.

Questions-

1. What and why are the prices mentioned in the passage?
2. What will be the life of those who give importance to time?
3. Which person has ruined himself?
4. "Every moment of time is precious". Which example is presented in the passage for this statement?
5. What inspiration do we get from this passage?

=====

## ग्रीष्मावकाश गृह कार्य

### कक्षा- 5 (हिंदी)

प्रश्न-1. मंत्री ने अपने बेटे को शहर क्यों भेजा ?

प्रश्न-2. फसल के त्योहार पर 'तिल' का बहुत बड़ा महत्व है। तिल का किन-किन रूपों में इस्तेमाल किया जाता है ?

प्रश्न-3. आप अपने साथियों के साथ कौन-कौन से खेल खेलते हो ?

प्रश्न-4. लड़की ने लोनपोगार के सम्मुख क्या शर्त रखी ?

प्रश्न-5. निम्नलिखित शब्दों के अर्थ लिखिए।

अंदाज -

कतार -

प्रांत -

पर्व -

समस्या -

प्रस्ताव -

### व्याकरण

प्रश्न-1. शब्द किसे कहते हैं ?

प्रश्न-2. भाषा के कितने रूप होते हैं ?

प्रश्न-3. वर्ण कितने प्रकार के होते हैं ?

प्रश्न-4. भाषा की सबसे छोटी इकाई क्या है ?

प्रश्न-5. वाक्य किसे कहते हैं ?

प्रश्न-6. वाक्य के कितने अंग हैं ?

**Subject – Environmental Studies**  
**Revision Sheet – 1 (Holiday Homework)**

**1. Answer the following questions.**

a) Why are lizards not seen during winters?

---

---

b) What are endangered animals?

---

---

c) Who are poachers?

---

---

d) Why do people kill wild animals?

---

---

e) Why is the tiger in danger?

---

---

---

---

---

---

---

---

**2. Answer the following questions in three -four lines:**

a) What is the main function of the tongue? What are the four types of tastes?

---

---

---

b) Why can we not taste food properly when we have a cold?

---

---

---

c) How does your stomach help in the digestion of food?

---

---

---

d) What symptoms will a child show who eats junk food?

---

---

---

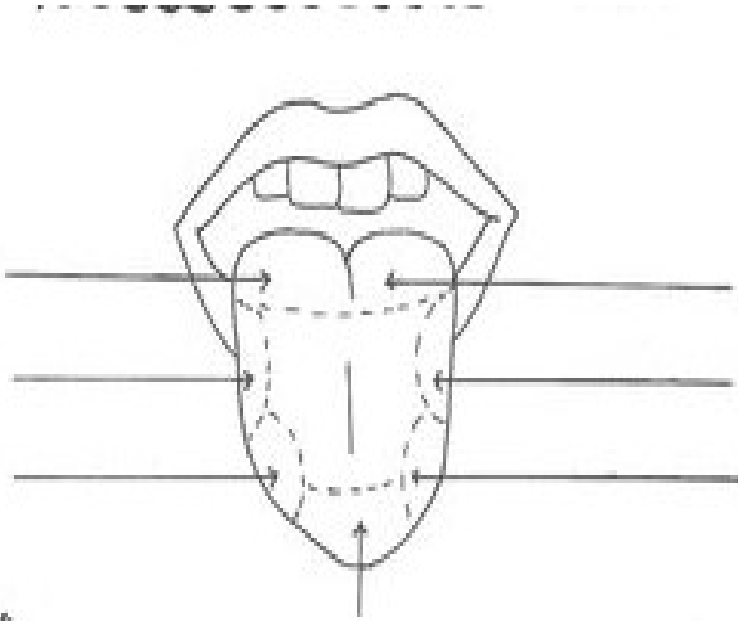
e) It is said that digestion starts in the mouth. How can you support this statement?

---

---

---

3. Look at the picture of the tongue given below and mark the parts of the tongue where you can taste sweet, bitter, sour and salty.



^


A. Observe the following pictures and fill in the blanks:




1. Snakes are an important part in the life of ..... They carry the snakes from village to village in ..... baskets. They make the snakes dance by playing the .....



2. It is a special dance of the people of ..... known as ..... dance. The movements in this dance will be similar to the dance of the ..... The dancers wear long black ..... with silver ribbons.



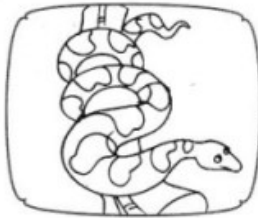



3. ...., ....., ..... and Tumba are the musical instruments used by the been party. Except Dhol all other things are made up of .....



4. Snakes have two hollow teeth called ..... . When it bites the ..... enters the person's body through these.

**B. Identify the snakes and name them:**



1. .... 2. .... 3. .... 4. ....

**C. Match the following:**

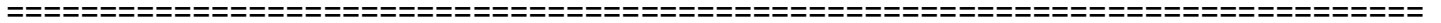
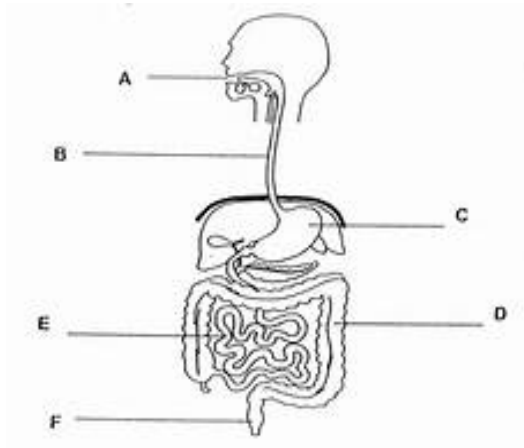
- |                           |                         |
|---------------------------|-------------------------|
| 1. Tusk of an Elephant    | (a) decoration          |
| 2. Skin of Snake          | (b) ornaments           |
| 3. Horn of Rhinoceros     | (c) liver oil           |
| 4. Skin of Tiger, Lion    | (d) belt                |
| 5. Fat of Whale and Shark | (e) medicine            |
| 6. Skin of Cow            | (f) meat                |
| 7. Poison of Snake        | (g) hand bags, chappals |
| 8. Shell of Tortoise      | (h) snakebite           |
| 9. Ostrich                | (i) ornamental          |

**D. Snake – charmers depend on snake for their livelihood. Find out the name of the animals on which the following people depend on:**

**Name of people    Animal on which they depends**

1. Milkman
2. Poultry farmer
3. Farmer
4. Tonga wala
5. Washer man

E. Label the following diagram.



HAPPY HOLIDAYS  
STAY SAFE, STAY AT HOME